



Cloudera

DS-200 Exam

Data Science Essentials

Thank you for Downloading DS-200 exam PDF Demo

You can Buy Latest DS-200 Full Version Download

<https://www.certkillers.net/Exam/DS-200>

<https://www.certkillers.net>

Question: 1

Why should stop an interactive machine learning algorithm as soon as the performance of the model on a test set stops improving?

- A. To avoid the need for cross-validating the model
- B. To prevent overfitting
- C. To increase the VC (VAPNIK-Chervonenkis) dimension for the model
- D. To keep the number of terms in the model as possible
- E. To maintain the highest VC (Vapnik-Chervonenkis) dimension for the model

Answer: B

Question: 2

What is default delimiter for Hive tables?

- A. ^A (Control-A)
- B. , (comma)
- C. \t (tab)
- D. : (colon)

Answer: A

Explanation:

Reference:

[http://blog.spryinc.com/2013/10/four-useful-tricks-for-working-with-hive\(change the delimiter when exporting hive table\)](http://blog.spryinc.com/2013/10/four-useful-tricks-for-working-with-hive(change the delimiter when exporting hive table))

Question: 3

Certain individuals are more susceptible to autism if they have particular combinations of genes expressed in their DNA . Given a sample of DNA from persons who have autism and a sample of DNA from persons who do not have autism, determine the best technique for predicting whether or not a given individual is susceptible to developing autism?

- A. Native Bayes
- B. Linear Regression
- C. Survival analysis
- D. Sequencealignment

Answer: B

Question: 4

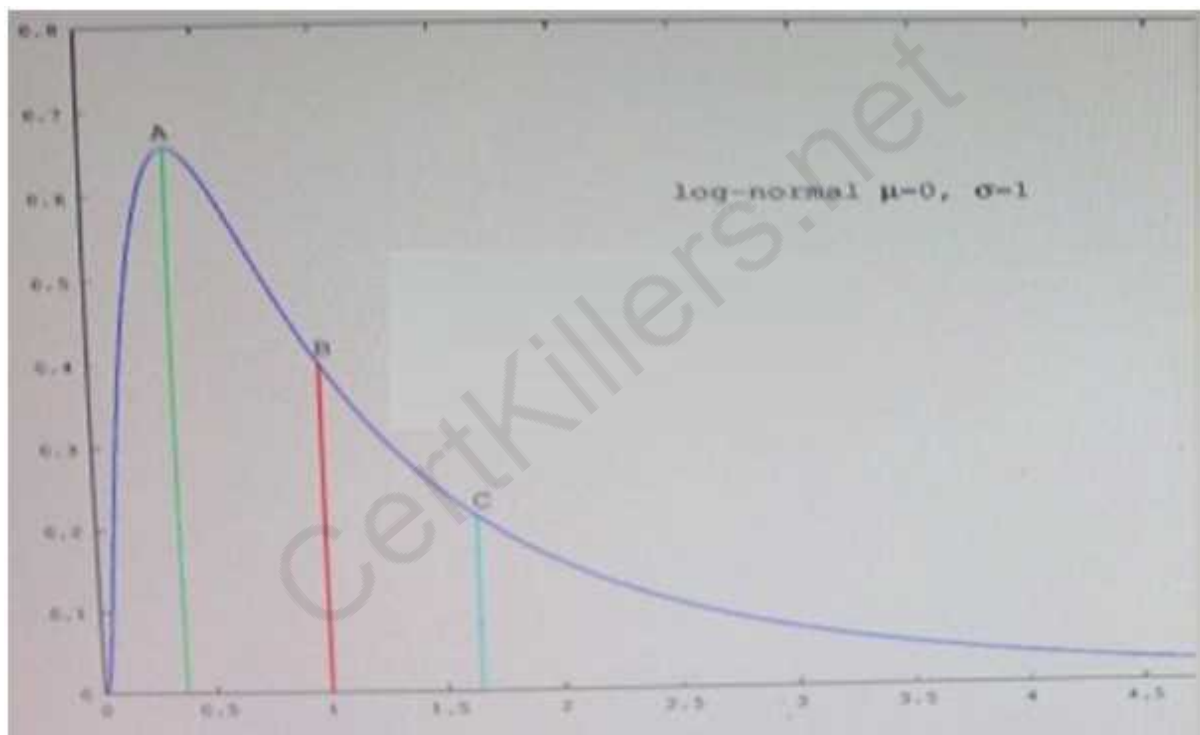
You are working with a logistic regression model to predict the probability that a user will click on an ad. Your model has hundreds of features, and you're not sure if all of those features are helping your prediction. Which regularization technique should you use to prune features that aren't contributing to the model?

- A. Convex
- B. Uniform
- C. L2
- D. L1

Answer: A

Question: 5

Refer to the exhibit.



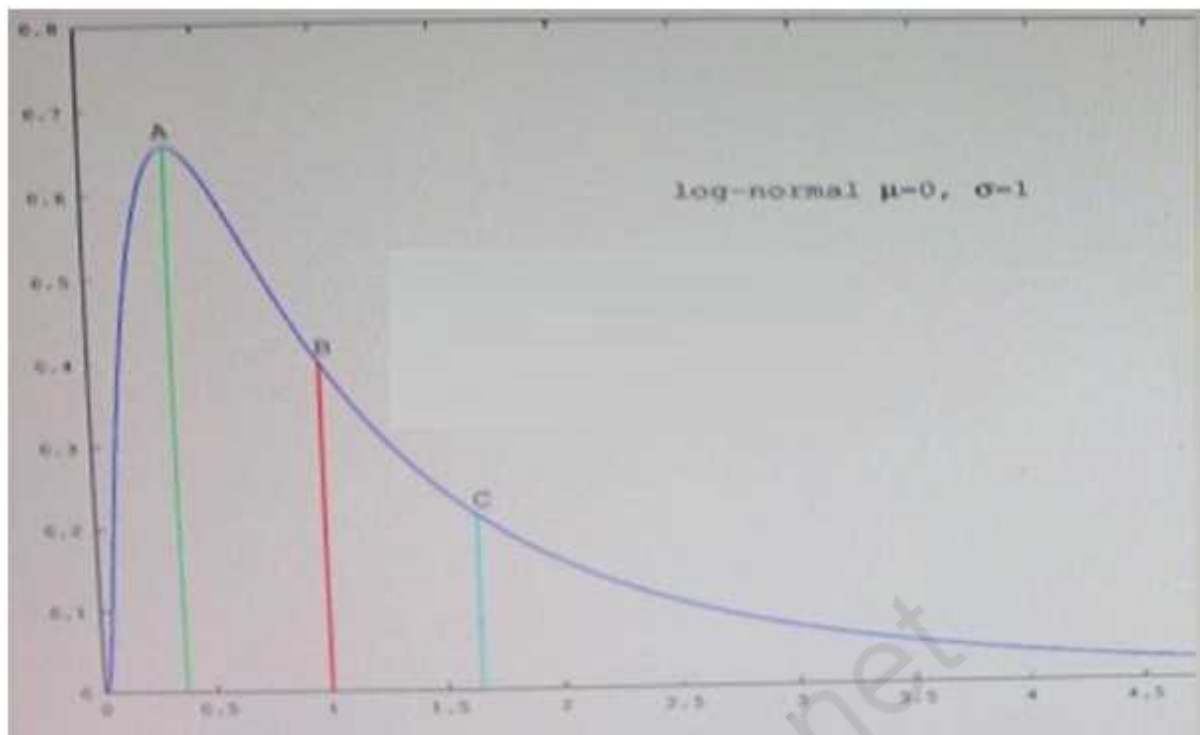
Which point in the figure is the median?

- A. A
- B. B
- C. C

Answer: A

Question: 6

Refer to the exhibit.



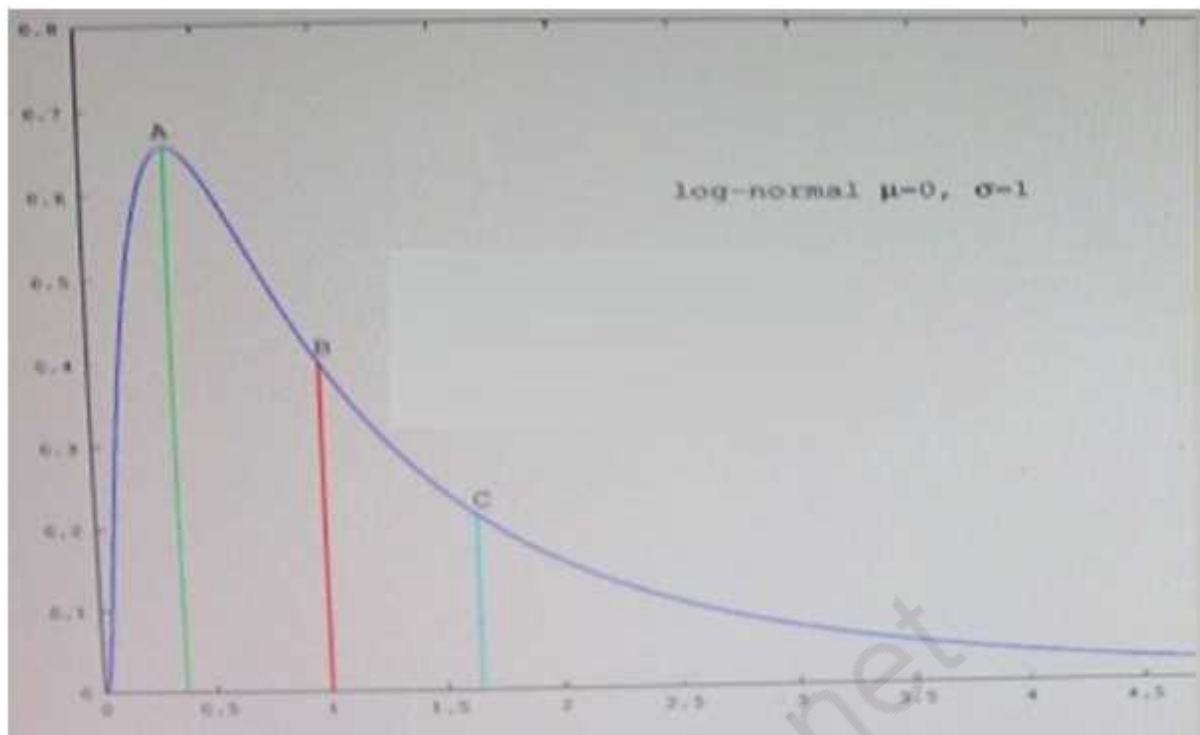
Which point in the figure is the mode?

- A. A
- B. B
- C. C

Answer: C

Question: 7

Refer to the exhibit.



Which point in the figure is the mean?

- A. A
- B. B
- C. C

Answer: B

Thank You for trying DS-200 PDF Demo

To Buy Latest DS-200 Full Version Download visit link below

<https://www.certkillers.net/Exam/DS-200>

Start Your DS-200 Preparation

[Limited Time Offer] Use Coupon “CKNET” for Further discount on your purchase. Test your DS-200 preparation with actual exam questions.

<https://www.certkillers.net>